

Moltiplicazioni in montagna

Ad ogni moltiplicazione e' abbinato un vegetale. Esegui le moltiplicazioni, guarda la grandezza del risultato e scrivi il nome del vegetale corrispondente negli spazi della montagna

$$\begin{array}{r} 220X \\ 4 = \\ \hline \end{array}$$




QUERCIA

$$\begin{array}{r} 508X \\ 3 = \\ \hline \end{array}$$




LARICE

$$\begin{array}{r} 213X \\ 4 = \\ \hline \end{array}$$



PINO

$$\begin{array}{r} 115X \\ 6 = \\ \hline \end{array}$$




CASTAGNO

$$\begin{array}{r} 658X \\ 4 = \\ \hline \end{array}$$




RODODENDRO

$$\begin{array}{r} 107X \\ 9 = \\ \hline \end{array}$$



FAGGIO

$$\begin{array}{r} 304X \\ 5 = \\ \hline \end{array}$$



PINO MUGO

$$\begin{array}{r} 316X \\ 7 = \\ \hline \end{array}$$



PINO MUGO

$$\begin{array}{r} 426X \\ 5 = \\ \hline \end{array}$$



STELLA ALPINA

